


Solve each problem.


- 1) For every cup of flour 4 batches of cookies can be made.

Create a table showing the batches of cookies that can be made with up to 5 cups of flour, then plot the values on the coordinate plane.




- 2) Every box of candy has 6 pieces of candy.

Create a table showing the pieces of candy in up to 5 boxes, then plot the values on the coordinate plane.



- 3) Every piece of chicken costs \$1.00.

Create a table showing the price for up to 5 pieces of chicken, then plot the values on the coordinate plane.



- 4) For every lawn mowed \$4 are earned.

Create a table showing the money earned for mowing up to 5 lawns, then plot the values on the coordinate plane.

