

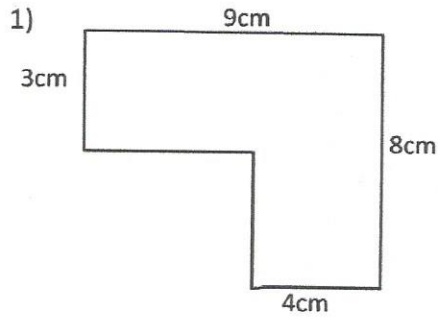
Name \_\_\_\_\_

Date \_\_\_\_\_

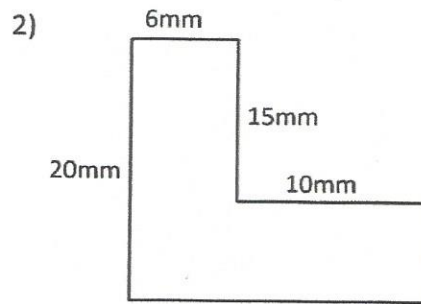


## AREA SHEET

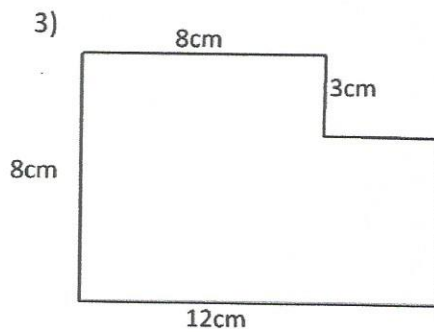
Work out the area of the following shapes by dividing them into rectangles. They are not to scale. *Show your work!*



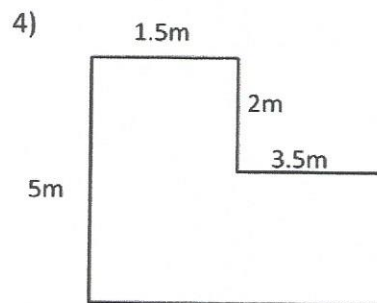
Area = \_\_\_\_\_



Area = \_\_\_\_\_



Area = \_\_\_\_\_



Area = \_\_\_\_\_

*Remember to write down the correct units.*