


Name: _____

Digital Time

Write the digital time to match each analog clock face:

1.



2.



3.



4.



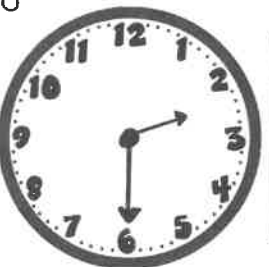
5.



6.



7.



8.



Name: _____

Digital Time

Write the digital time to match each analog clock face.

1.



2.



3.



4.



5.



6.



7.



8.




Name: _____

Analog Time

Draw the analog clock hands to match each digital time:

1.




9:30

2.



2:00

3.



12:30

4.



7:30

5.




6:00

6.



11:30

7.



3:00

8.



8:00

Name: _____

Analog Time

Draw the analog clock hands to match each digital time:

1.




3:15

2.



6:45

3.



10:15

4.



12:45

5.




1:15

6.



10:45

7.



3:45

8.



7:15