





# Homework

Name \_\_\_\_\_

Date \_\_\_\_\_



Write the time on the digital clock. Then write how to say the time.

1.




\_\_\_\_\_

2.




\_\_\_\_\_

3.



\_\_\_\_\_


4.



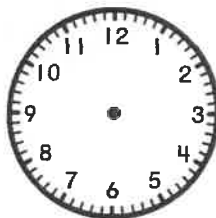
\_\_\_\_\_

Draw the hands on the analog clock. Write the time on the digital clock.


5. twenty-eight minutes after four



6. six forty-five




7. quarter to seven




Write the time on the digital clock. Then write how to say the time.

8.





\_\_\_\_\_

9.



\_\_\_\_\_

10.



\_\_\_\_\_



# Homework

Write the times as minutes *after* an hour and minutes *before* an hour.

1.



\_\_\_\_\_  
\_\_\_\_\_

2.



\_\_\_\_\_  
\_\_\_\_\_

3.



\_\_\_\_\_  
\_\_\_\_\_

4.



\_\_\_\_\_  
\_\_\_\_\_

5.



\_\_\_\_\_  
\_\_\_\_\_

6.



\_\_\_\_\_  
\_\_\_\_\_

7.



\_\_\_\_\_  
\_\_\_\_\_

8.



\_\_\_\_\_  
\_\_\_\_\_

9.



\_\_\_\_\_  
\_\_\_\_\_

**Homework****Complete.**

1. Complete the table.

Start Time	Elapsed Time	End Time
2:00 P.M.		10:00 P.M.
2:27 A.M.		4:45 A.M.
3:30 A.M.	1 hour and 22 minutes	
2:10 P.M.	3 hours and 16 minutes	
	2 hours and ten minutes	11:00 A.M.
	4 hours and 39 minutes	7:53 P.M.

**Solve. Use your clock if you need to.**

2. Liza left the library at 11:30 A.M. on Saturday.  
She had been there for 1 hour and 25 minutes.  
What time did she get to the library?
- \_\_\_\_\_

3. Andres spent from 4:15 P.M. to 5:05 P.M. doing  
chores. How much time did Andres spend  
doing his chores?
- \_\_\_\_\_

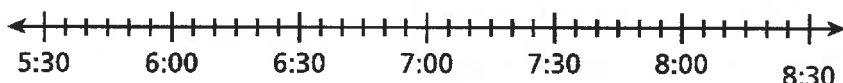
4. Arjun arrived at baseball practice at 5:15 P.M.  
He practiced for 1 hour and 30 minutes.  
What time did baseball practice end?
- \_\_\_\_\_

5. Today Sarah's piano lessons started at 4:15 P.M.  
She was finished with her lessons at 5:10 P.M.  
How long was Sarah at piano lessons?
- \_\_\_\_\_

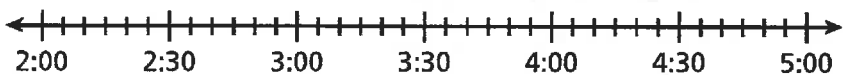
**Homework**

Solve using a number line.

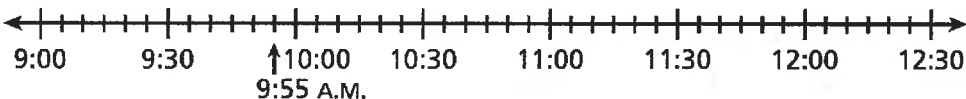
1. Terry began watching a movie at 5:45 P.M. The movie lasted 2 hours 20 minutes. Then Terry spent 25 minutes eating a snack. What time did Terry finish eating the snack?



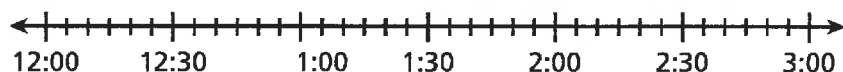
2. Evan left his friend's house at 5:00 P.M. He had been there 2 hours 15 minutes. At what time did Evan arrive at his friend's house?



3. Haley began reading her book at 9:55 A.M. She read for 1 hour 35 minutes. Then she spent 45 minutes doing homework. What time did Haley finish her homework?



4. Myra left home at 12:45 P.M. She spent 30 minutes eating lunch and 50 minutes watching a parade. Then it took her 15 minutes to drive home. What time did Myra return home?



**Homework**

**Solve. Use a clock or sketch a number line diagram if you need to.**

1. Rhea arrived at the mall at 3:45 P.M. She spent 45 minutes having lunch and then she shopped for 55 minutes before leaving the mall. How much time did Rhea spend at the mall?
- \_\_\_\_\_

2. Mrs. Cox is baking a ham for dinner. It takes 1 hour 30 minutes to bake. The family eats at 6:15 P.M. What time should Mrs. Cox put the ham in the oven?
- \_\_\_\_\_

3. Dina started chores at 8:15 A.M. and finished at 9:05 A.M. It took her 30 minutes to clean her room and she spent the rest of the time bathing her dog. How long did Dina spend bathing her dog?
- \_\_\_\_\_

4. Jerry finished skating at 7:00 P.M. He skated for 1 hour 45 minutes. What time did he start skating?
- \_\_\_\_\_

5. Jason started his project at 2:30 P.M. and finished 2 hours and 15 minutes later. He spent 25 minutes doing research, 30 minutes writing a report, and the rest of the time building a model. What time did he finish his project? How much time did he spend building the model?
- \_\_\_\_\_

